

SC5122&1  
WASSCE 2020  
PHYSICS 2&1 **2&1**  
Essay and Objective  
2¾ hours

THE WEST AFRICAN EXAMINATIONS COUNCIL

West African Senior School Certificate Examination  
for School Candidates

SC 2020

PHYSICS 2 & 1

2¾ hours

*Do not open this booklet until you are told to do so. While you are waiting, read the following instructions carefully. Write your name and index number in ink in the spaces provided above.*

*This booklet consists of two papers. Answer Paper 2 which comes first, in your answer booklet and Paper 1 on your Objective Test answer sheet. Paper 2 will last 1½ hours after which the answer booklets will be collected. Do not start Paper 1 until you are told to do so. Paper 1 will last 1¼ hours.*

Answer eight questions in all; five questions from Part I and three questions from Part II.

PART I  
[15 marks]

Answer any five questions from this part.

All questions carry equal marks.

1. A varying force  $F$  applied to a spring produces corresponding extension  $e$ , in the spring.
  - (a) State two quantities that can be deduced from a graph of  $F$  against  $e$  within the elastic limit of the spring.
  - (b) Show how any of the quantities stated in (a) could be obtained from the graph. [3 marks]
  
2.
  - (a) State two dangers associated with improper use of lasers.
  - (b) State one safe way of using lasers. [3 marks]
  
3. Give the reason for using
  - (a) steel as a compass needle.
  - (b) soft iron as a core of electromagnets. [3 marks]
  
4. The electrical resistance of a semiconductor decreases with increase in temperature. Use the band theory to explain this observation. [3 marks]
  
5. A bullet is fired from a gun at  $30^\circ$  to the horizontal. The bullet remains in flight for 25 s before touching the ground. Calculate the velocity of projection. [3 marks]  
[ $g = 10 \text{ m s}^{-2}$ ]
  
6. A satellite launched with velocity  $V_E$  just escapes the earth's gravitational attraction. Given that the radius of the earth is  $R$ , show that  $V_E = \sqrt{20R}$ . [3 marks]
  
7.
  - (a) What is a black body?
  - (b) Sketch the graphs of intensity against wavelength for a black body radiations at temperatures 1000 K and 2000 K on the same axes. [3 marks]

Answer three questions from this part.  
All questions carry equal marks.

8. (a) (i) Define *friction*.  
(ii) State **two** situations **each** for which friction is considered to be:  
( $\alpha$ ) desirable;  
( $\beta$ ) undesirable. [6 marks]
- (b) (i) State the **two** conditions fulfilled by a body undergoing simple harmonic motion.  
(ii) A pendulum of length 130.0 cm has a period of oscillation,  $T_1$ . The bob is pulled and released to move in a horizontal circle of radius 50.0 cm. If the period of rotation is  $T_2$ , calculate the ratio  $T_1 : T_2$ .  
[ $g = 10 \text{ m s}^{-2}$ ,  $\pi = 3.142$ ] [7 marks]
- (c) A lorry and a car with the same kinetic energy are brought to rest by application of equal retarding forces. Explain why the two vehicles will cover the same distance before coming to rest. [2 marks]
9. (a) (i) Explain *magnetic saturation*.  
(ii) State **two** methods of demagnetizing a magnet. [4 marks]
- (b) (i) Define *electrical power*.  
(ii) An electric heating coil of resistance  $R$  is immersed in 1 kg of water at  $20^\circ\text{C}$ . The coil is connected in series with a resistor  $Y$  across a 240 V mains supply. The temperature of the water rises to the boiling point in 10 minutes. When  $Y$  is disconnected, the time taken for the 1 kg of water at the same temperature to boil is reduced to 6 minutes. Neglecting all heat losses, calculate the resistance  $R_Y$  of  $Y$ .  
[ Specific heat capacity of water =  $4200 \text{ J kg}^{-1} \text{ K}^{-1}$ ] [7 marks]
- (c) (i) State and explain the effect of doubling the number of turns of the coil without changing the frequency of rotation on the output voltage of an a.c. generator.  
(ii) Illustrate the effect in (i) on a graph of e.m.f. against time for one complete rotation.

10. (a) (i) Define a *wave*.  
 (ii) Differentiate between *transverse waves* and *longitudinal waves*.  
 [4 marks]
- (b) A source of sound of frequency 550 Hz emits waves of wavelength 600 mm in air at 20 °C. Calculate the:  
 (i) speed of sound at this temperature;  
 (ii) wavelength of the sound at 0 °C.  
 [6 marks]
- (c) State:  
 (i) **three** defects of the eye;  
 (ii) the type of lens used to correct **each** of the defects stated in (i).  
 [3 marks]
- (d) State **one**:  
 (i) advantage of using a convex mirror as a driving mirror;  
 (ii) disadvantage of using a convex mirror as a driving mirror.  
 [2 marks]

11. (a) In an experiment to measure the specific latent heat of vaporization of water, a student places a heater in a beaker containing water. The beaker stands on an electronic balance so that the mass of the beaker and water could be measured. The heater is switched on and the reading taken every 100 s when the water starts boiling. The table below shows the readings.

Time/s	0	100	200	300	400
Reading on balance/g	203.22	201.62	199.79	198.26	196.50
Mass of water evaporated/g	0				

- (i) Copy and complete the table.  
 (ii) Given that the heater supplies energy at the rate of  $38 \text{ J s}^{-1}$ , add to your table, values of the energy supplied by the heater in 100 s, 200 s, 300 s and 400 s.  
 (iii) Plot a graph of energy supplied on the vertical axis and mass of water evaporated on the horizontal axis, starting both axes from the origin (0, 0).  
 (iv) Determine the slope of the graph.  
 (v) What does the value of the slope mean?  
 [12 marks]
- (b) (i) Explain what is meant by *saturated vapour pressure*.  
 (ii) State the factor that affects saturated vapour pressure.  
 [3 marks]

12. (a) (i) Explain the statement *light is quantized*.  
(ii) Define *work function*.  
(iii) When light of frequency  $5.4 \times 10^{14}$  Hz is incident on a metal surface, the maximum energy of the emitted electrons is  $1.2 \times 10^{-19}$  J. Calculate the **minimum** frequency of radiation for which electrons can be emitted.  
[ $h = 6.6 \times 10^{-34}$  J s]
- [7 marks]
- (b) Define **each** of the following terms:  
(i) Atomic number;  
(ii) Mass number.
- [2 marks]
- (c) Radon has mass number 222 and atomic number 86. Radon decays by emitting two beta particles to form radium-222.  
Write:  
(i) the symbol for radon nuclide;  
(ii) an equation to represent the decay process.
- [3 marks]
- (d) State **three** properties of x-rays.
- [3 marks]

***END OF ESSAY TEST***

# BLANK SHEET

**DO NOT TURN OVER THIS PAGE  
UNTIL YOU ARE TOLD TO DO SO.**

**YOU WILL BE PENALIZED SEVERELY IF YOU ARE  
FOUND LOOKING AT THE NEXT PAGE BEFORE  
YOU ARE TOLD TO DO SO.**

**WHILE YOU ARE WAITING, READ THE  
FOLLOWING INSTRUCTIONS CAREFULLY.**

PAPER 1  
OBJECTIVE TEST  
[50 marks]

1¼ hours

- Use 2B pencil throughout.
- On the pre-printed answer sheet, check that the following details are **correctly** printed:
  - In the space marked *Name*, check your **surname** followed by your **other names**.
  - In the spaces marked *Examination, Year, Subject and Paper*, check 'WASSCE', 'SC 2020', 'PHYSICS', and '1' in that order.
  - In the box marked *Index Number*, your **index number** has been printed vertically in the spaces on the left-hand side and each numbered space has been shaded in line with each digit. **Reshade** each of the shaded spaces.
  - In the box marked *Subject Code*, the digits 512113 are printed vertically in the spaces on the left-hand side. **Reshade** the corresponding numbered spaces as you did for your index number.
- An example is given below. This is for a male candidate whose *name* is Elliot Kofi AGBANA.

**THE WEST AFRICAN EXAMINATIONS COUNCIL  
ANSWER SHEET**

PRINT IN BLOCK LETTERS		GHA	
Name:	AGBANA ELLIOT KOFI	Year:	SC 2020
Examination:	WASSCE	Subject:	PHYSICS
		Paper:	1

**INSTRUCTIONS TO CANDIDATES**

- Use grade 2B pencil throughout.
- Answer each question by choosing one letter and shading it like this:  A  B  C  D  E
- Erase completely any answer you wish to change.
- Leave extra spaces blank if the answer spaces provided are more than you need.
- Do not make any markings across the heavy black marks at the right hand edge of your answer sheet.

INDEX NUMBER	
7	<input type="checkbox"/> 0 <input type="checkbox"/> 1 <input type="checkbox"/> 2 <input type="checkbox"/> 3 <input type="checkbox"/> 4 <input type="checkbox"/> 5 <input type="checkbox"/> 6 <input type="checkbox"/> 7 <input type="checkbox"/> 8 <input type="checkbox"/> 9
1	<input type="checkbox"/> 0 <input type="checkbox"/> 1 <input type="checkbox"/> 2 <input type="checkbox"/> 3 <input type="checkbox"/> 4 <input type="checkbox"/> 5 <input type="checkbox"/> 6 <input type="checkbox"/> 7 <input type="checkbox"/> 8 <input type="checkbox"/> 9
0	<input type="checkbox"/> 0 <input type="checkbox"/> 1 <input type="checkbox"/> 2 <input type="checkbox"/> 3 <input type="checkbox"/> 4 <input type="checkbox"/> 5 <input type="checkbox"/> 6 <input type="checkbox"/> 7 <input type="checkbox"/> 8 <input type="checkbox"/> 9
2	<input type="checkbox"/> 0 <input type="checkbox"/> 1 <input type="checkbox"/> 2 <input type="checkbox"/> 3 <input type="checkbox"/> 4 <input type="checkbox"/> 5 <input type="checkbox"/> 6 <input type="checkbox"/> 7 <input type="checkbox"/> 8 <input type="checkbox"/> 9
1	<input type="checkbox"/> 0 <input type="checkbox"/> 1 <input type="checkbox"/> 2 <input type="checkbox"/> 3 <input type="checkbox"/> 4 <input type="checkbox"/> 5 <input type="checkbox"/> 6 <input type="checkbox"/> 7 <input type="checkbox"/> 8 <input type="checkbox"/> 9
4	<input type="checkbox"/> 0 <input type="checkbox"/> 1 <input type="checkbox"/> 2 <input type="checkbox"/> 3 <input type="checkbox"/> 4 <input type="checkbox"/> 5 <input type="checkbox"/> 6 <input type="checkbox"/> 7 <input type="checkbox"/> 8 <input type="checkbox"/> 9
3	<input type="checkbox"/> 0 <input type="checkbox"/> 1 <input type="checkbox"/> 2 <input type="checkbox"/> 3 <input type="checkbox"/> 4 <input type="checkbox"/> 5 <input type="checkbox"/> 6 <input type="checkbox"/> 7 <input type="checkbox"/> 8 <input type="checkbox"/> 9
9	<input type="checkbox"/> 0 <input type="checkbox"/> 1 <input type="checkbox"/> 2 <input type="checkbox"/> 3 <input type="checkbox"/> 4 <input type="checkbox"/> 5 <input type="checkbox"/> 6 <input type="checkbox"/> 7 <input type="checkbox"/> 8 <input type="checkbox"/> 9
5	<input type="checkbox"/> 0 <input type="checkbox"/> 1 <input type="checkbox"/> 2 <input type="checkbox"/> 3 <input type="checkbox"/> 4 <input type="checkbox"/> 5 <input type="checkbox"/> 6 <input type="checkbox"/> 7 <input type="checkbox"/> 8 <input type="checkbox"/> 9
8	<input type="checkbox"/> 0 <input type="checkbox"/> 1 <input type="checkbox"/> 2 <input type="checkbox"/> 3 <input type="checkbox"/> 4 <input type="checkbox"/> 5 <input type="checkbox"/> 6 <input type="checkbox"/> 7 <input type="checkbox"/> 8 <input type="checkbox"/> 9

SUBJECT CODE	
5	<input type="checkbox"/> 0 <input type="checkbox"/> 1 <input type="checkbox"/> 2 <input type="checkbox"/> 3 <input type="checkbox"/> 4 <input type="checkbox"/> 5 <input type="checkbox"/> 6 <input type="checkbox"/> 7 <input type="checkbox"/> 8 <input type="checkbox"/> 9
1	<input type="checkbox"/> 0 <input type="checkbox"/> 1 <input type="checkbox"/> 2 <input type="checkbox"/> 3 <input type="checkbox"/> 4 <input type="checkbox"/> 5 <input type="checkbox"/> 6 <input type="checkbox"/> 7 <input type="checkbox"/> 8 <input type="checkbox"/> 9
2	<input type="checkbox"/> 0 <input type="checkbox"/> 1 <input type="checkbox"/> 2 <input type="checkbox"/> 3 <input type="checkbox"/> 4 <input type="checkbox"/> 5 <input type="checkbox"/> 6 <input type="checkbox"/> 7 <input type="checkbox"/> 8 <input type="checkbox"/> 9
1	<input type="checkbox"/> 0 <input type="checkbox"/> 1 <input type="checkbox"/> 2 <input type="checkbox"/> 3 <input type="checkbox"/> 4 <input type="checkbox"/> 5 <input type="checkbox"/> 6 <input type="checkbox"/> 7 <input type="checkbox"/> 8 <input type="checkbox"/> 9
1	<input type="checkbox"/> 0 <input type="checkbox"/> 1 <input type="checkbox"/> 2 <input type="checkbox"/> 3 <input type="checkbox"/> 4 <input type="checkbox"/> 5 <input type="checkbox"/> 6 <input type="checkbox"/> 7 <input type="checkbox"/> 8 <input type="checkbox"/> 9
3	<input type="checkbox"/> 0 <input type="checkbox"/> 1 <input type="checkbox"/> 2 <input type="checkbox"/> 3 <input type="checkbox"/> 4 <input type="checkbox"/> 5 <input type="checkbox"/> 6 <input type="checkbox"/> 7 <input type="checkbox"/> 8 <input type="checkbox"/> 9

**For Supervisors only**  
If candidate is absent shade this space

Answer all the questions.

Each question is followed by four options lettered A to D. Find the correct option for each question and shade in pencil on your answer sheet, the answer space which bears the same letter as the option you have chosen. Give only one answer to each question. An example is given below.

- A body starts moving with a speed of  $40 \text{ m s}^{-1}$  and accelerates uniformly to  $90 \text{ m s}^{-1}$  in 4.0 s. Calculate the distance travelled.
- A. 100 m
  - B. 180 m
  - C. 200 m
  - D. 260 m

The correct answer is 260 m, which is lettered D, and therefore answer space D would be shaded.

A  B  C  D

Think carefully before you shade the answer spaces; erase completely any answer(s) you wish to change.

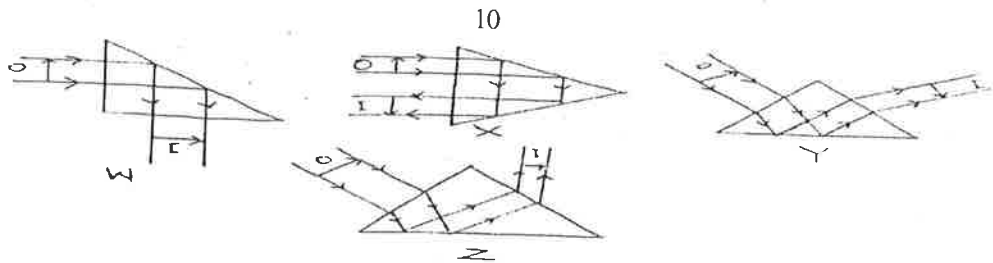
Do all rough work on this question paper.

Now answer the following questions.

1. In a collision between two objects, kinetic energy is conserved only if
  - A. one of the objects is initially at rest.
  - B. potential energy is converted to work.
  - ~~C.~~ the collision is elastic.
  - D. the collision is inelastic.
2. The quantity of motion of a body is its
  - A. acceleration.
  - ~~B.~~ momentum.
  - C. displacement.
  - D. velocity.
3. The volume of a fixed mass of a gas varies inversely as the pressure on it provided the temperature is constant. This statement is
  - A. General gas law.
  - ~~B.~~ Boyle's law.
  - C. Charles' law.
  - D. Pressure law.
4. An image formed on a screen is always
  - A. virtual.
  - ~~B.~~ upright.
  - C. magnified.
  - ~~D.~~ inverted.

5. How would the capacitance of a parallel plate capacitor be affected if the distance of separation of its plates is decreased? It would
- A. drop to zero.
  - B. remain unchanged.
  - C. decrease slightly.
  - ~~D.~~ increase in value.
6. Which of the following machines does **not** apply the lever principle?
- A. Sugar tong
  - ~~B.~~ Single pulley
  - C. Wheelbarrow
  - D. Claw hammer
7. The average distance moved by a molecule between collisions is called
- A. molecular distance.
  - B. intermolecular distance.
  - ~~C.~~ mean free path.
  - D. mean distance.
8. Which of the following waves require a material medium for its propagation?
- A. Radio waves
  - ~~B.~~ Sound waves
  - C. X-rays
  - D. Light waves
9. The depolarizing agent in a Leclanché cell is
- A. zinc plate.
  - ~~B.~~ manganese(IV) oxide.
  - C. ammonium chloride.
  - D. carbon rod.
10. The material used to slow down the neutrons in a nuclear reactor is
- A. uranium.
  - ~~B.~~ graphite.
  - C. copper.
  - D. boron.
11. Which of the following statements explains why hot soapy water is more effective in cleaning oil-stained dishes?
- A. Soap increases the surface tension of oil and water.
  - B. Hot water increases the surface tension of oil.
  - ~~C.~~ Soap and heat decrease the surface tension of water.
  - D. The oil on the dishes repels the soap.

12.



The diagrams above illustrate a beam of parallel rays from a distant object O, incident on one side of total reflecting prism. Which diagram does **not** represent the correct path of the beam when it emerges from the prism?

- A. Z
- B. Y
- C. X
- D. W

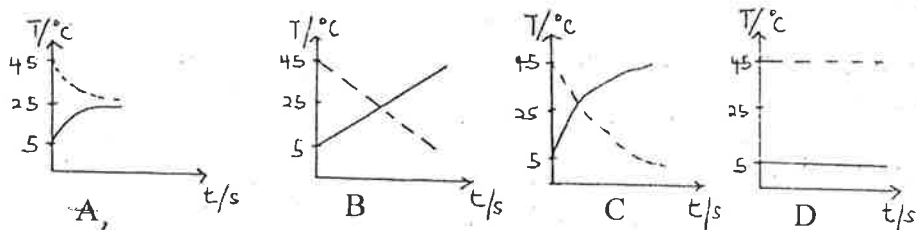
13. An electrical device has 50 turns in its primary coil and 20 turns in the secondary coil. The device can be

- A. an a.c. generator.
- B. a d.c. generator.
- ~~C. a step-down transformer.~~
- D. a step-up transformer.

14. The earpiece of a telephone handset converts energy from

- ~~A. electrical to sound.~~
- B. sound to electrical.
- C. radio wave to sound.
- D. sound to radio wave.

15. Two identical cups containing the same volume of water at 45 °C and 5 °C respectively, are left in a room at 25 °C. Which of the following graphs **correctly** illustrates the variation of temperature with time?



16. A ray of light travelling from glass into ethyl alcohol is incident at the boundary at an angle of incidence 30°. Calculate the angle of refraction.

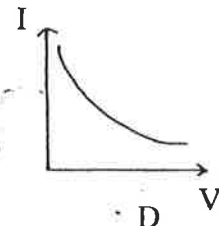
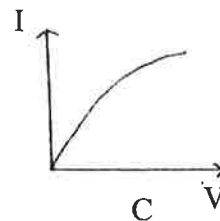
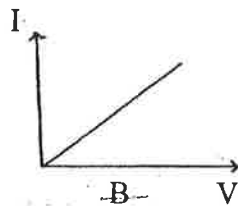
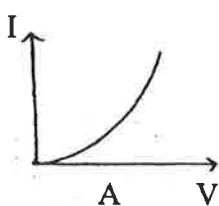
[refractive index of glass = 1.5; refractive index of ethyl alcohol = 1.36]

- A. 72.8°
- B. 51.7°
- C. 33.5°
- ~~D. 27.0°~~

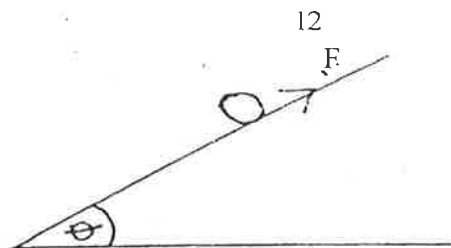
17. A 60 kg man stands on a weighing balance in an elevator. If the elevator accelerates upwards at 5 m s<sup>-2</sup>, determine the reading of the scale.

- ~~A. 900 N~~
- B. 800 N
- C. 600 N
- D. 300 N

18. The length of an iron bar is 100 cm at 20 °C. At what temperature will its length increase by 0.01 %? [Linear expansivity of iron =  $1.2 \times 10^{-5} \text{ } ^\circ\text{C}^{-1}$ ]
- A. 23.0 °C  
 B. 28.3 °C  
 C. 38.0 °C  
 D. 48.0 °C
19. A moving-coil galvanometer which gives a full-scale deflection with 0.005 A is converted to a voltmeter reading up to 5 V using an external resistor of 975  $\Omega$ . What is the resistance of the meter?
- A. 250.00  $\Omega$   
 B. 25.00  $\Omega$   
 C. 2.50  $\Omega$   
 D. 0.25  $\Omega$
20. A beam consisting of  $\alpha$ -particles,  $\beta$ -particles and  $\gamma$ -rays pass through a magnetic field at right angles to the direction of the field. Which of the following observations would be made about the  $\alpha$ -particles,  $\beta$ -particles and  $\gamma$ -rays respectively?
- A. Deflected, deflected, deflected  
 B. Deflected, deflected, not deflected  
 C. Deflected, not deflected, deflected  
 D. Not deflected, deflected, deflected
21. A parallel plate capacitor is charged and the charging battery subsequently disconnected. If the plates of the capacitor are moved farther apart by means of insulating handles, the
- A. capacitance would increase.  
 B. capacitance would decrease.  
 C. charge on the capacitor would increase.  
 D. charge on the capacitor would decrease.
22. The velocity of sound in air at 15 °C is 340 m s<sup>-1</sup>. Calculate the velocity at 47 °C.
- A. 322 m s<sup>-1</sup>  
 B. 358 m s<sup>-1</sup>  
 C. 602 m s<sup>-1</sup>  
 D. 790 m s<sup>-1</sup>
23. Which of the current-voltage characteristics shown below is that exhibited by an ohmic conductor?



24. A 500 N box rests on a horizontal floor. A constant horizontal force is exerted on the box so that it moves through 8 m. If the coefficient of kinetic friction between the floor and the box is 0.22, calculate the work done on the box.
- A. 110 J  
 B. 400 J  
 C. 440 J  
 D. 880 J

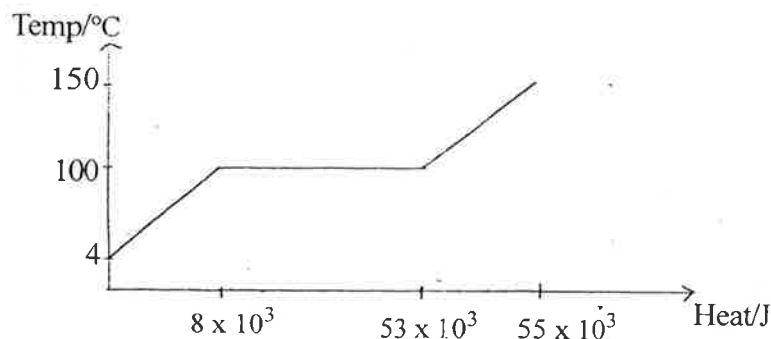


The diagram above illustrates a ball of mass  $m$  sliding down a plank inclined at an angle of  $\theta$  to the horizontal. The kinetic friction between the ball and the plank is  $F$  and acceleration of free fall is  $g$ . Use this information to answer questions 25 and 26.

25. The normal force on the ball is
- $mg \sin \theta$ .
  - $mg \tan \theta$ .
  - $mg \cos \theta$ .
  - $mg \cot \theta$ .
26. The net force on the ball along the plank is
- $mg \sin \theta + F$ .
  - $F - mg \cos \theta$ .
  - $mg \sin \theta - F$ .
  - $F + mg \cos \theta$ .
27. What factors determine the frequency of a note emitted by a vibrating string?
- Amplitude of vibration, force constant of string, length of string
  - Amplitude of vibration, force constant of string, tension in string
  - Mass per unit length of string, tension in string, length of string
  - Force constant of string, tension in string, length of string
28. The magnitude of the force experienced by a charge of  $1.6 \times 10^{-8} \text{ C}$  in a uniform electric field of intensity  $5 \times 10^5 \text{ N C}^{-1}$  is
- $3.1 \times 10^{13} \text{ N}$ .
  - $8.0 \times 10^3 \text{ N}$ .
  - $8.0 \times 10^{-3} \text{ N}$ .
  - $3.2 \times 10^{-14} \text{ N}$ .
29. Which of the following statements about viscosity is **not** true. It
- depends on areas of the surfaces in contact.
  - is independent of the relative velocity of the layers.
  - occurs in fluids.
  - depends on the tangential force between the layers.
30. A motorcycle starting from rest, is uniformly accelerated such that its velocity in 10 s is  $72 \text{ km hr}^{-1}$ . What is its acceleration?
- $2 \text{ m s}^{-2}$
  - $4 \text{ m s}^{-2}$
  - $86 \text{ m s}^{-2}$
  - $108 \text{ m s}^{-2}$
31. The temperature of an object is raised by  $120 \text{ }^\circ\text{C}$ . The resulting increase in its absolute temperature is
- 393 K.
  - 200 K.
  - 120 K.
  - 50 K.

32. Which of the following statements about the motion of a simple pendulum is **true**?
- A. It swings faster at the poles than at the equator.
  - B. It possesses maximum kinetic energy at the extreme positions.
  - C. It passes the equilibrium position with minimum speed.
  - D. It is a simple harmonic motion when the angle of displacement is large.
33. An electron of mass  $m$  and charge  $e$  moves in a circular path in a magnetic field of flux density  $B$ . How long does it take to complete one orbit?
- A.  $\frac{2me}{B\pi}$
  - B.  $\frac{2B}{me\pi}$
  - C.  $\frac{2\pi m}{Be}$
  - D.  $\frac{Be}{2m\pi}$
34. Which of the following statements about photoelectrons is **correct**?
- A. A faint green light produces photoelectrons with less kinetic energy than bright red light.
  - B. A red light releases a smaller number of electrons than a green light.
  - C. A faint green light produces photoelectrons with greater kinetic energy than a bright red light.
  - D. A red light releases a greater number of electrons than a green light.

35.



The sketched graph above illustrates the heating curve of a 0.02 kg of water. Determine the approximate value of the specific latent heat of vaporization of water.

- A.  $1.00 \times 10^3 \text{ J kg}^{-1}$
  - B.  $2.00 \times 10^3 \text{ J kg}^{-1}$
  - C.  $4.17 \times 10^3 \text{ J kg}^{-1}$
  - D.  $2.25 \times 10^6 \text{ J kg}^{-1}$
36. In the hydraulic press, the force  $F$  applied is related to the diameter  $d$  of the cylinder by
- A.  $F \propto d^2$ .
  - B.  $F \propto d^1$ .
  - C.  $F \propto d$ .
  - D.  $F \propto d^2$ .

37. In an electric circuit, an inductor of inductance  $0.5 \text{ H}$  and resistance  $50 \Omega$  is connected to an alternating current source of frequency  $60 \text{ Hz}$ . Calculate the impedance of the circuit.
- $1950.1 \Omega$
  - $195.0 \Omega$
  - $150.5 \Omega$
  - $50.0 \Omega$
38. Which of the following statements **correctly** explains why a total solar eclipse would be seen by people on only a small portion of the earth surface. The
- moon is larger in diameter than the earth.
  - earth is larger in diameter than the moon.
  - earth is larger in diameter than the sun.
  - earth revolves round the sun.
39. Water waves have a wavelength of  $3.6 \text{ cm}$  and speed of  $18 \text{ cm s}^{-1}$  in deep water. If the waves enter shallow water with wavelength of  $2.0 \text{ cm}$ , calculate the speed of the waves in the shallow water.
- $10.8 \text{ cm s}^{-1}$
  - $10.0 \text{ cm s}^{-1}$
  - $2.5 \text{ cm s}^{-1}$
  - $0.4 \text{ cm s}^{-1}$
40. An a.c. generator can be converted to a d.c. electric motor by replacing the
- slip rings with a split ring and connecting a battery.
  - split ring with slip rings and connecting a battery.
  - a.c. with d.c. source and connecting slip rings.
  - a.c. with d.c. source and connecting split rings.
41. A ray of light travels obliquely from a less dense medium to a denser medium. Which of the following statements is **true** about the light?
- The wavelength of the light increases in the second medium.
  - The speed of the light increases in the second medium.
  - The light refracts towards the normal.
  - There is a change in the frequency of the light.
42. An electron of mass  $9.1 \times 10^{-31} \text{ kg}$  is travelling at a speed of  $2 \times 10^6 \text{ m s}^{-1}$ . Calculate the associated wavelength of the electron.  $[h = 6.6 \times 10^{-34} \text{ J s}]$
- $6.89 \times 10^{-4} \text{ m}$
  - $3.63 \times 10^{-7} \text{ m}$
  - $3.63 \times 10^{-8} \text{ m}$
  - $3.63 \times 10^{-10} \text{ m}$
43. Which of the following statements about the process of melting of a solid are **true**? The temperature of the solid will
- remain steady until melting starts.
  - keep rising until melting starts.
  - remain steady as melting proceeds.
  - keep rising as melting proceeds.
- II and III only
  - III and IV only
  - I, II and III only
  - II, III and IV only

44. A diver steps off a diving platform that is 10 m above the water. If there is no air resistance during the fall, there will be a decrease in the diver's
- A. gravitational potential energy.
  - B. total mechanical energy.
  - C. kinetic energy.
  - D. momentum.
45. Which of the following actions would increase the electric force between two positively charged particles?
- A. Decreasing the mass of the particles
  - B. Decreasing the distance between the particles
  - C. Increasing the distance between the particles
  - D. Increasing the mass of the particles
46. A luminous object is one that
- A. gives off dim blue-green light only in the dark.
  - B. shines by reflected light only.
  - C. gives out light of its own.
  - D. glows only in the presence of light.
47. Which of the following units is **not** fundamental?
- A. Candela
  - B. joule
  - C. Kilogram
  - D. Metre
48. The vacuum between the double walls of a thermos flask reduces heat loss through
- A. conduction only.
  - B. radiation only.
  - C. convection and conduction.
  - D. conduction and radiation.
49. In photoelectric effect, the number of electrons emitted per second from a metallic surface is proportional to the
- A. work function of the metal.
  - B. energy of the incident radiation.
  - C. frequency of the radiation.
  - D. intensity of the incident radiation.
50. When two cells of negligible internal resistance and equal e.m.f. denoted by  $E_1$  and  $E_2$  are connected in parallel, the combined e.m.f.  $E$  is given by
- A.  $E = \frac{E_1}{E_2}$
  - B.  $E = E_1 = E_2$
  - C.  $\frac{1}{E} = \frac{1}{E_1} + \frac{1}{E_2}$
  - D.  $E = E_1 + E_2$

**END OF PAPER**